

GOLDLITE SUPPLIES

HOLIDAY ASSIGNMENTS

Contact us on 0724351706

GRADE 4 2026

NAME: _____ **ASSESSMENT NUMBER:** _____

SCHOOL: _____ **DATE:** _____

Exceeding Expectation	Meeting Expectation	Approaching Expectation	Below Expectation	Total Score (%)

SOCIAL STUDIES ACTIVITIES

TIME: 1 HOUR 30 MINUTES

1. Our country, **Kenya**, has ___ counties.
A. 42 B. 47 C. 9 D. 5
2. Our county is **Nairobi City County**. It is headed by a:
A. Governor B. President C. Senator D. MCA
3. Grade 4 learners learnt about physical features found in the county. Which one is **not a physical feature**?
A. Mountains B. Bridges C. Hills D. Rivers
4. Kageni and friends discussed vegetation that grows in swampy areas. Which one is it?
A. Papyrus reeds B. Tall grass C. Trees D. Forest
5. Keeping cattle for milk production is called:
A. Beef farming B. Dairy farming C. Poultry farming D. Pastoralism
6. Grade 4 learners learnt about moral values. Which one is **not a moral value**?
A. Arrogance B. Honesty C. Obedience D. Humility
7. Our National Flag has four colours. Which colour represents the **people of Kenya**?
A. Red B. White C. Black D. Green
8. There are ___ seasons in the county.
A. 4 B. 2 C. 3 D. 5

9. The daily weather record is recorded on a:
A. Weather chart B. Book C. Calendar D. Symbols
10. Which of the following signs shows **calm weather conditions**?



11. A person you don't know is a:
A. Stranger B. Visitor C. Friend D. Guest
12. When there is a fire outbreak, we should move out of the house:

A. Slowly B. Quickly C. Together D.

Majestically

13. ___ is a thorny plant.

A. Acacia B. Baobab C. Euphorbia D. Grass

14. Which road sign means **danger ahead**?

A.



B.



C.



D.



15. Farmers prepare their land for planting during the ___ season.

A. Rainy B. Dry C. Wet D. Cold

16. We depend on ___ for treatment.

A. Doctors B. Teachers C. Drivers D. Police

17. A place with many people is said to be **densely populated**.

A. Densely B. Sparsely C. Linear D. Uneven

18. People's way of life is called:

A. Value B. Wealth C. Culture D. Ceremony

19. The following are historic built monuments in the county. Which one is **not**?

A. Schools B. Monuments C. Cultural centres
D. Monuments

20. Farmers prepare their land for planting during the ___ season.

A. Rainy B. Dry C. Wet D. Cold

NAME: _____ ASSESSMENT NUMBER: _____

SCHOOL: _____ DATE: _____

Exceeding Expectation	Meeting Expectation	Approaching Expectation	Below Expectation	Total Score (%)

CRE ACTIVITIES**TIME: 1 HOUR**

- The hometown of Jesus Christ was:
A. Nazareth B. Bethlehem
C. Canaan D. Jerusalem
- Wendy, a Grade 4 learner, is a prefect. She writes down the noise-makers but spares her best friend, Ann. What does Wendy lack?
A. Fairness B. Goodness
C. Patience D. Humility
- Who wanted Balaam to curse the Israelites?
A. Balak B. Amorites C. Israelites D. Moab
- Who killed a lion with his bare hands?
A. David B. Balak C. Tamar D. Samson
- Abram was ___ years old when God called him.
A. 60 B. 175 C. 75 D. 99
- ___ is one of the patriarchs of the Israel nation.
A. Joseph B. John
C. Abraham D. Isaac
- When someone accepts their mistakes and asks for forgiveness, we say he has:
A. Sinned
B. Forgiven
C. Repented
D. Accepted
- What would you do if you found 100 shillings in your class?
A. Hide it in my bag
B. Give it to my friend
C. Give it to my class teacher
D. Buy snacks
- According to Exodus 20:12, children should:
A. Obey B. Disobey C. Hate D. Abuse
- Blind Bartimaeus called Jesus the son of:
A. Jesus B. God C. David D. Joseph
- We should always ___ God's commands.
A. Obey B. Disobey C. Ignore D. Play
- God created ___ in His own image and likeness.
A. Human beings
B. Plants
C. Animals
D. Snake
- Peter, your classmate, lost your pencil. As a Christian, what should you do?
A. Forgive him
B. Ask him to pay you
C. Report him to your parent
D. Fight him
- Jesus walked on water. Therefore, Christians should learn about:
A. Walking
B. Faith
C. Obedience
D. Patience
- My ___ is a member of my extended family.
A. Brother
B. Sister
C. Cousin
D. Father

FORMATIVE ASSESSMENT

NAME: _____ ASSESSMENT NUMBER: _____

SCHOOL: _____ DATE: _____

Exceeding Expectation	Meeting Expectation	Approaching Expectation	Below Expectation	Total Score (%)

IRE ACTIVITIES

TIME: 1 HOUR

- | | |
|--|---|
| <ol style="list-style-type: none"> 1. Which Surah must be recited in Salah?
A. Surah Ikhlas
B. Surah Falaq
C. Surah Kafirun
D. Surah Fatiha 2. The first verse of Surah Ikhlas is:
A. Qul a'udhu bi Rabbil Falaq
B. Qul huwallahu Ahad
C. Bismillahi Rahmaani Rahiim
D. Qul a'udhu bi Rabbin Naas 3. The best time to recite Surahs Falaq and Naas is:
A. Before sleep
B. Before entering the toilet
C. Before going to the mosque
D. Before mixing with people 4. Angel, Holy Books, Prophets, and the Last Day are pillars of:
A. Iman B. Ihsaan C. Islam D. Religion 5. Taurat is the holy book given to Prophet:
A. Dawud B. Issa C. Musa D. Ibrahim 6. Halimat As-Saadiya ___ Prophet Muhammad (S.A.W).
A. Circumcised B. Taught
C. Punished D. Breastfed 7. Which Salah is correctly matched with its time of praying?
A. Fajr – in the night
B. Dhuhr – at dawn
C. Asr – at midday
D. Maghrib – after sunset | <ol style="list-style-type: none"> 8. If you always share your things with your neighbour, then you are:
A. Punctual B. Honest
C. Generous D. Polite 9. The parts of Wudhu are washed ___ times.
A. Five
B. Three
C. Two
D. Four 10. No ___ is accepted without Wudhu.
A. Sawm B. Shahada
C. Ibaada D. Salah 11. Which one of these is a posture for Salah?
A. Ruku'u B. Dhikr C. Tahara D. Niyya 12. "Allahumma bismika Amuutu wa Ahyaa" is the dua we recite:
A. When we wake up
B. When we sleep
C. When we are happy
D. When we start something 13. Where was Prophet Muhammad (S.A.W) born?
A. Madina B. Taif C. Makkah D. Shaam 14. When a Muslim child is born, we celebrate:
A. Aqiqah
B. Milad un Nabi
C. Eid
D. Juma 15. Who among these was a rich business lady?
A. Amina
B. Halima
C. Ummul Jamil
D. Khadi |
|--|---|

COMPETENCE BASED EDUCATION

GRADE 4 2026

FORMATIVE ASSESSMENT

NAME: _____ ASSESSMENT NUMBER: _____

SCHOOL: _____ DATE: _____.

Exceeding Expectation	Meeting Expectation	Approaching Expectation	Below Expectation	Total Score (%)

MATHEMATICS ACTIVITIES

TIME: 1 HOUR 15 MINUTES

1. What is the **place value** of digit 7 in the number 785?

A. Ones B. Tens C. Hundreds D. Thousands

2. There are 846 people in Tesa Village. How is this written in **symbols**?

A. 80046 B. 8046 C. 846 D. 8460

3. What is the **missing number** in the pattern?

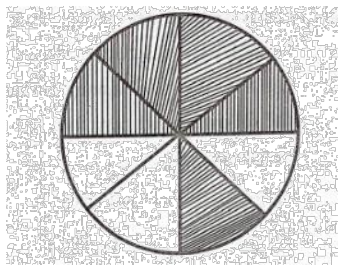
15, 20, 25, 30, _____

A. 35 B. 40 C. 36 D. 50

4. A debate was attended by 2,174 men and 1,758 women. How many people attended the debate?

A. 3,932 B. 3,832 C. 4,032 D. 3,922

5. This shape is called:



A. - B. - C. - D. -

6. Which one of the following is a triangle?



A B C D

7. Georgia had 80 hens. She sold 45 hens. How many hens did she **remain with**?

A. 125 B. 20 C. 35 D. 55

8. Learners from Mpeketoni Primary School were discussing number values. Which number among the following has the **smallest value**?

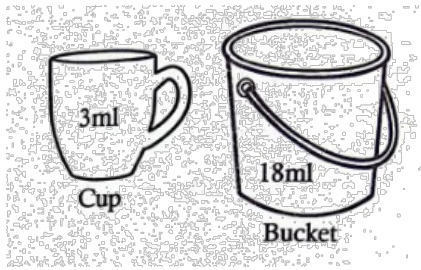
A. 258

B. 285

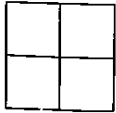
C. 825

D. 528

9. Grade Four learners went for an outdoor practical lesson. A bucket contains 18ml and a cup holds 3ml.




How many cups will fill the bucket?

- A. 6 B. 9 C. 21 D. 54
10. Add: $336 + 464 = \underline{\quad}$
A. 7910 B. 700 C. 800 D. 900
11. Joseph, a Grade Four pupil, was asked to identify a **need**. Which one did he identify?
A. Clothes B. Camera C. Radio D. Car
12. What is $\frac{1}{3}$ of 24?
A. 6 B. 7 C. 9 D. 8
13. Grade 4 learners drew the image as shown below.
- 
- How many squares did they see?
A. 5 B. 6 C. 4 D. 7
14. Which number is missing?
 $8 + \underline{\quad} + 6 = 21$
A. 14 B. 9 C. 6 D. 7
15. Cynthia bought 45kg of rice and 28kg of beans. What is the **total mass**?
A. 73kg B. 63kg C. 47kg D. 71kg
16. What is the **total value of digit 4** in the number 3457?
A. 4 B. 40 C. 400 D. 4,000

17. Arrange the numbers from **largest to smallest**: 90, 190, 290, 394
A. 190, 290, 394, 90 B. 394, 290, 190, 90
C. 394, 190, 290, 90 D. 90, 190, 290, 394
18. Round off 67 to the **nearest 10**.
A. 60 B. 70 C. 68 D. 80
19. A green grocer bought 7 bunches of bananas. Each bunch had 6 bananas. How many bananas did he buy?
A. 42 B. 36 C. 48 D. 60
20. Mercy had 28 sweets. She gave $\frac{1}{4}$ of the sweets to her friends. How many sweets did she give out?
A. 13 B. 7 C. 20 D. 14
21. 30 players were chosen to represent a group of young footballers. 16 were women. How many men were there?
A. 14 B. 46 C. 16 D. 12
22. A farmer bought a total of 6,783 goats. What is the **place value** of digit 8 in the number?
A. Ones B. Thousands C. Tens D. Hundreds
23. A class has 16 boys. Half of them shaved their heads. How many boys shaved their heads?
A. 16 B. 8 C. 4 D. 32
24. What is the **next number** in the pattern:
5, 8, 11, 14, $\underline{\quad}$
A. 16 B. 17 C. 18 D. 20
25. Cludy bought 24 pens. She shared them equally among her 6 children. How many pens did each child get?
A. 4 B. 3 C. 5 D. 6
26. Which month comes **after March**?
A. February B. April C. August D. January

27. Grace was given a Sh.500 note. She bought a packet of milk at Sh.100 and bread at Sh.70. How much **change** did she remain with?
 A. Sh.400 B. Sh.430 C. Sh.330 D. Sh.570
28. Arrange the positions below from **highest to lowest**:
 78, 74, 87, 63, 58, 45. The mark in the 3rd position is:
 A. 74 B. 63 C. 45 D. 78
29. Read and write the following number in figures: **Sixty-nine**
 A. 96 B. 69 C. 66 D. 79

30. Complete the pattern below:



ELIMU MSINGI KWA MISINGI YA UMAHIRI

GREDI 4 2026

TATHMINI ENDELEVU

JINA: _____ **NAMBARI YA TATHMINI:** _____

SHULE: _____ **TAREHE:** _____.

Kuzidisha matarajio	Kufikisha matarajio	Kukaribia matarajio	Chini ya matarajio	Jumla (%)

SHUGHULI ZA KISWAHILI

MUDA: SAA 1 DAKIKA 40

Zoezi la 1: UFAHAMU

Sehemu ya Kwanza: Soma kifungu kisha ujibu maswali 1–6

Somo ni mvulana mwenye bidii shuleni. Anapenda kujifunza mengi mtandaoni. Wakati mwingine huzingatia usalama akiwa mtandaoni. Siku moja alipata ujumbe mtandaoni. Alidhani ni rafiki yake, lakini ujumbe ulitoka kwa mtu asiyemjua. Mtu huyo alimwomba wakutane mahali pa faragha na alimwambia alikuwa na zawadi yake. Somo alionywa na wazazi wake na hakukutana na mtu huyo.

- | | |
|--|---|
| <p>1. Somo alikuwa mwenye bidii wapi?
 A. Nyumbani B. Kanisani
 C. Shuleni D. Mahali pazuri</p> <p>2. Somo alipata ujumbe kutoka kwa nani?
 A. Baba yake B. Mwalimu
 C. Rafiki yake D. Mtu asiyejua</p> <p>3. Mtu huyo alimwambia Somo wakutane wapi?
 A. Mahali pa faragha B. Shuleni
 C. Nyumbani D. Sokoni</p> | <p>4. Je, ni nani alifanya Somo asikutane na mtu huyo?
 A. Mwalimu B. Rafiki C. Wazazi D. Mchezoni</p> <p>5. Unapotumia mtandao, ni nini kinachofaa kuzingatia?
 A. Mwalimu B. Masomo C. Usalama D. Rafiki</p> <p>6. Somo alipata ujumbe wapi?
 A. Mtandaoni B. Shuleni
 C. Nyumbani D. Sokoni</p> |
|--|---|

16. Unafikiria kwa nini mama Sanau aliandaa hivyo vyakula?
 A. Kwa sababu ni vitamu B. Vinatupatia afya nzuri
 C. Ndio washibe
- Sehemu ya Nne: Jaza pengo kwa majibu sahihi 17–22**

17. Mimi na kaka ___ **Rosa** tulikuwa ...
 A. yangu B. yake C. zangu D. wangu
18. Tukitazama ___
 A. jikoni B. sebuleni C. shuleni D. barabarani
- Sehemu ya Tano: Jibu kulingana na maagizo 23–30**

23. Kanusha: Watoto wanakula wali.
 A. Watoto wanakula wali.
 B. Mtoto anakula wali.
 C. Watoto hawali wali.
 D. Watoto hawakuli wali.
24. Chagua kivumishi katika sentensi: Dada yangu anapika vizuri.
 A. Dada B. Anapika C. Vizuri D. Yangu
25. Chagua nomino ya pili katika sentensi: Mjomba wangu anaitwa Juma.
 A. Mjomba B. Wangu C. Juma D. Anaitwa
26. Tegua kitendawili: Nifungue nikufunike.
 A. Mwavuli B. Mlango C. Leso D. Dirisha

19. Sisi tunapenda sana ___
 A. michezo B. mpira C. runinga D. vibonzo
20. Dada yangu mkubwa Nina aliingia sebuleni ___ kwenda ...
 A. kandanda B. wanyama C. chakula D. uwanja
21. Alifungulia kwa sauti ya juu ___
 A. na B. wa C. kwa D. za
22. Alifungulia ___
 A. kompyuta B. biashara C. redio D. televisheni

27. Kamilisha methali: Asiyefunzwa na mamaye hufunzwa na ___
 A. Baba yake B. Rafiki C. Mwalimu D. Ulimwengu
28. Ukubwa wa neno "mtoto" ni:
 A. Kitoto B. Watoto C. toto D. Jitoto
29. Kati ya mavazi yafuatayo, ni lipi huvaliwa na wavulana pekee?
 A. Bombo B. Kanchiri C. Blousi D. Rinda
30. Je, nomino kiwazi hupatikana katika ngeli ipi?
 A. Ki-Vi B. A-Wa C. I-Zi D. Li-Ya

COMPETENCE BASED EDUCATION

GRADE 4 2026

FORMATIVE ASSESSMENT

NAME: _____ ASSESSMENT NUMBER: _____

SCHOOL: _____ DATE: _____

Exceeding Expectation	Meeting Expectation	Approaching Expectation	Below Expectation	Total Score (%)

SCIENCE AND TECHNOLOGY ACTIVITIES

TIME: 1 HOUR

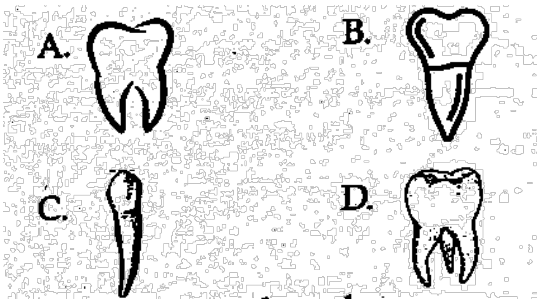
1. A Grade 4 learner observed a plant increasing in size, height, length, and width. This means the plant has:
 - A. Reproduced
 - B. Grown
 - C. Removed waste
 - D. Responded to changes in the environment
2. During a group discussion, learners were asked: "Anything that is alive, grows, reproduces, feeds, and dies is called?"
 - A. Living thing
 - B. Non-living thing
 - C. Plant
 - D. Animal
3. Grade 4 learners went on a Science nature walk. They identified different parts of a plant and their functions. The following are functions of roots **except**:
 - A. Making food
 - B. Supporting the plant
 - C. Storing food
 - D. Absorbing water
4. A learner planted seeds in the school garden and watered them regularly. He observed their germination. The following are needed for plant germination **except**:
 - A. Sunlight
 - B. Water
 - C. Oxygen
 - D. Food
5. Grade 4 pupils visited a farm near their school and saw some animals.



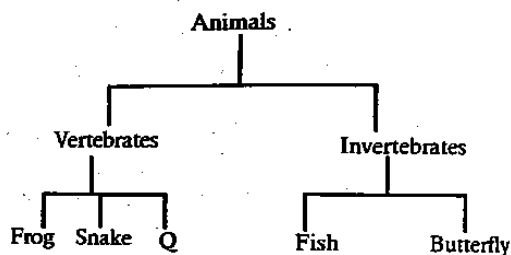
What caused the death of the animals?

- A. Drought B. Sunny C. Rain D. Floods
6. I am an insect. I love staying in dirty utensils. Who am I?
 - A. Living thing
 - B. Non-living thing
 - C. Plant
 - D. Animal
 7. As Joel walked home from school, he observed animals moving differently. Which animal moves differently from the others?
 - A. Ostrich
 - B. Mosquito
 - C. Bat
 - D. Butterfly
 8. The equipment where utensils are dried after washing is called:
 - A. Rack
 - B. Rank
 - C. Shelf
 - D. Shelve
 9. During digestion, food is broken down into small particles to release energy. Which of the following is **not** part of the human digestive system?
 - A. Mouth
 - B. Stomach
 - C. Nose
 - D. Rectum

10. Animals are mainly divided into two groups:
 A. Domestic and wild
 B. Green and non-green
 C. Flowering and non-flowering
 D. Vertebrate and invertebrate
11. Animals with a backbone are called vertebrates, and those without a backbone are invertebrates. Which animal below **does not** have a backbone?
 A. Snake B. Whale C. Snail D. Lion
12. Grade 4 learners used items to protect themselves when handling plants. Which of the following protects the eyes?
 A. Goggles B. Gloves
 C. Apron D. Gumboots
13. Which one is **not** a way to maintain a healthy digestive system?
 A. Proper dental hygiene B. Eating sugary foods
 C. Deworming D. Healthy eating
14. Which one is **not** a symptom of an unhealthy digestive system?
 A. Diarrhea B. Headache
 C. Bloating D. Constipation
15. Learners shared photos from a nature walk online using all of the following **except**:
 A. WhatsApp B. Instagram
 C. Facebook D. Radio
16. In which part of a plant does transpiration take place?
 A. Stem B. Roots C. Leaves D. Flowers
17. Which of the following teeth is a premolar?

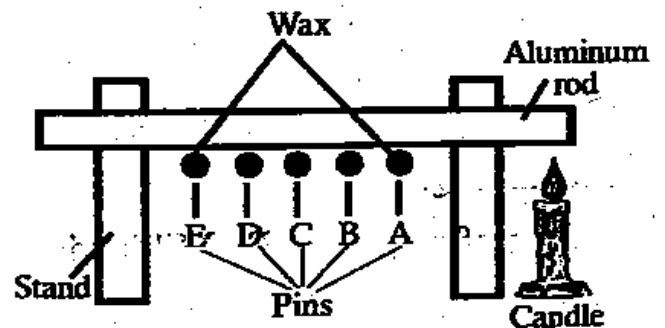


18. The following chart shows animal classification:



Which animal can replace Q?

- A. Housefly B. Fish C. Hen D. Butterfly
19. Which animal is wrongly grouped?
 A. Frog B. Millipede C. Snake D. Spider
20. Mr. Bakari keeps livestock in Kitengela. How should he best care for his animals?
 A. Water them B. Slaughter them
 C. Beat them D. Not feed them
21. Harvesting is done during which season?
 A. Rainy B. Windy C. Sunny D. Calm
22. Things in the environment that breathe, grow, and reproduce are called:
 A. Plants B. Animals
 C. Living things D. Non-living things
23. What is the best water for drinking?
 A. Cooked B. Boiled C. Decanted D. Sieved
24. The process of taking in and releasing air by animals is called:
 A. Exhaling B. Breathing
 C. Digestion D. Excretion
25. In an experiment using pins, wax, stand, and an aluminum rod, which pin fell first?



- A. Pin A
 B. Pin D
 C. Pin E
 D. Pin C

COMPETENCE BASED EDUCATION

GRADE 4 2026

FORMATIVE ASSESSMENT

NAME: _____ ASSESSMENT NUMBER: _____

SCHOOL: _____ DATE: _____

Exceeding Expectation	Meeting Expectation	Approaching Expectation	Below Expectation	Total Score (%)

AGRICULTURE AND NUTRITION ACTIVITIES

TIME: 1 HOUR

1. Grade 4 learners learned about fuels used at home. Which one is **not** a fuel?
A. Petrol B. Firewood
C. Kerosene D. Charcoal
2. To grow healthy, we need the following **except**:
A. Food B. Television C. Play D. Rest
3. Three of the following are energy-giving foods. Which one is **not**?
A. Ugali B. Rice C. Meat D. Chapati
4. A meal containing all three food groups is called:
A. Energy-giving B. Balanced diet
C. Body-building D. Self-contained meal
5. Three of the following are types of soil. Which one is **not**?
A. Clay B. Sand C. Loam D. Manure
6. Ken wants to make a pot. Which type of soil should he use?
A. Clay B. Loam C. Sand D. Model
7. Which material is **not** used to make compost manure?
A. Banana peels B. Plastic bottles C. Kitchen residue D. Fallen leaves and flowers
8. Which of the following animals is **not** kept at home?
A. Hare B. Cow C. Goat D. Sheep
9. Kaylah wants to cook an egg. Apart from shallow frying, which other method can she use?
A. Deep frying B. Boiling
C. Baking D. Shallow frying
10. Which farm tool is **not** used to prepare compost manure?
A. Hoe B. Wheelbarrow
C. Watering can D. Spade
11. A learner talks while eating. She was advised to follow:
A. Kitchen manners B. Table manners
C. Bedroom manners D. Classroom manners
12. Three of the following are ways of caring for seedlings. Which one is **not**?
A. Uprooting seedlings
B. Watering
C. Weeding
D. Mulching
13. Shania and her friends discussed gas uses. Which one is **not** a use of gas?
A. Cooking B. Providing light
C. Heating food D. Warming the house
14. Three of the following are body-building foods. Which one is **not**?
A. Chicken B. Fish C. Oranges D. Cow
15. We should wash our hands:
A. After using the toilet
B. Before eating
C. In the toilet
D. Going to the toilet

16. Materials that do **not** allow urine to pass through are called:
A. Blanket B. Mackintosh
C. Bedsheet D. Pillow
17. Meat of a pig is called:
A. Beef B. Mutton C. Pork D. Meat
18. To prevent birds from destroying plants, we can use:
A. Fence B. Net C. Electricity D. Scarecrow
19. Which animal can a farmer use to prepare the farm for planting?
A. Donkey B. Ox C. Cow D. Goat
20. Tiny seeded crops are placed into the seedbed by:
A. Putting B. Burying
C. Directly sowing D. Planting model
21. The best soil for construction is:
A. Sand B. Clay C. Loam D. Stones
22. Another name for young plants is:
A. Seedlings B. Fruit C. Flower D. Leaves
23. The following are methods of cooking **except**:
A. Boiling B. Baking C. Frying D. Heating
24. Instructions on how to take medicine are written by:
A. Doctor B. Teacher
C. Manufacturer D. Parent
25. After sweeping, we collect dust and dirt using:
A. Spade B. Pan C. Dustpan D. Jembe

ÉDUCATION BASÉE SUR LES COMPÉTENCES

GRADE 4 2026

FORMATIVE ASSESSMENT

NOM: _____ **NUMÉRO D'ÉVALUATION:** _____

ÉCOLE: _____ **DATE:** _____.

FRENCH

TEMPS : 1 HEURE 40 MINUTES

Dépasse les attentes	Atteint les attentes	Approche des attentes	En dessous des attentes	Score total (%)

Répondez à toutes les questions.

Read the passage and answer the questions.

Salut, je m'appelle Tina. J'ai neuf ans. Je suis kenyane. J'habite à Kajiado. Je parle maasai et français.

1. Où habite Tina ?

2. Quelle nationalité a Tina ?

3. Quelles langues parle Tina ?

_____ et _____

Write the family members in French.

i. Mother _____

ii. Father _____

iii. Sister _____

iv. Brother _____

Write the jumbled days of the week correctly.

a) udej _____

b) hcndmiea _____

c) dveidner _____

d) dilun _____

Write the numbers correctly in French.

a) 8 _____

b) 10 _____

c) 2 _____

d) 3 _____

Choose the correct spelling of the word in French.

a) Bye _____ (au revoir, au revwa, orevoir)

b) Hello _____ (bonjour, bojour, bonju)

c) I am fine _____ (sa va bien, ça va bien, ca va bien)

d) Thank you _____ (merci, mesi, mercci)

COMPETENCE BASED EDUCATION

GRADE 4 2026

FORMATIVE ASSESSMENT

NAME: _____ **ASSESSMENT NUMBER:** _____

SCHOOL: _____ **DATE:** _____.

Exceeding Expectation	Meeting Expectation	Approaching Expectation	Below Expectation	Total Score (%)

ENGLISH

TIME: 1 HOUR 40 MINUTES

Read the passage and answer the questions.

Once upon a time, in a small village surrounded by hills, there lived a boy named Juma. Every morning, Juma would walk to the river to fetch water for his family. One day, while at the river, he saw a fish struggling to swim because it was caught in a net. Juma decided to help the fish. He untangled it and set it free. The fish jumped happily into the water and swam away. The next day, Juma found a shiny pearl at the river bank, and he believed it was the fish's way of saying thank you.

- | | |
|--|---|
| <p>1. What did Juma do every morning?</p> <p>A. Wash his clothes</p> <p>B. Fetch water for his family</p> <p>C. Play near the river</p> <p>D. Go fishing</p> <p>2. Why do you think the fish left a pearl for Juma?</p> <p>A. The fish had many pearls</p> <p>B. Because Juma was fetching water for his family</p> <p>C. The fish was happy to be set free</p> <p>D. Juma and the fish were friends</p> | <p>3. What quality of Juma is shown in this story?</p> <p>A. Juma is selfish B. Juma is unkind</p> <p>C. Juma is cruel D. Juma is kind</p> <p>4. What is the opposite of the word “happily”?</p> <p>A. Bravely B. Cruelly</p> <p>C. Joyfully D. Sadly</p> <p>5. Why was the fish struggling to swim?</p> <p>A. The fish was sick</p> <p>B. It was caught in a net</p> <p>C. It was too big</p> <p>D. It was afraid of Juma</p> |
|--|---|

6. If you were in Juma's place, why would you help the fish?
- A. It was small
 - B. To make it swim back in the river
 - C. So that you could fetch more water
 - D. To make the fish thank you

Section B: Reading Comprehension (Questions 7–11)

In a small village near the forest, there lived a girl named Wanjiku. She loved spending time with her grandfather, who was a storyteller. Every evening, they would sit under the big mango tree, and her grandfather would tell stories about animals and their adventures. Wanjiku's favorite story was about a clever hare that outsmarted a hungry lion. One day, her grandfather gave her a notebook and told her to write her own stories. Wanjiku was excited and wrote about a kind elephant that helped other animals cross a river. Her grandfather smiled proudly as he read her story.

7. Where did Wanjiku and her grandfather sit in the evening?
- A. Near the forest
 - B. Inside the house
 - C. Under the big mango tree
 - D. Next to the river
8. What work does a storyteller do?
- A. Tell stories
 - B. Draw stories
 - C. Write stories
 - D. Sell stories
9. Wanjiku's favourite story was about:
- A. A clever lion and a hungry hare
 - B. A clever elephant and a hungry lion
 - C. An elephant and other animals
 - D. A clever hare and a hungry lion
10. What did her grandfather give Wanjiku one day?
- A. A pencil
 - B. A notebook
 - C. A storybook
 - D. A pen
11. Wanjiku's grandfather smiled as he read her story:
- A. Sadly
 - B. Happily
 - C. Proudly
 - D. Joyfully

Section C: Dialogue (Questions 12–15)

Read the dialogue and answer the questions.

Winnie: What are you planning to do this weekend, Joy?

Joy: I think I'll visit my grandmother. She promised to teach me how to make chapati! What about you?

Winnie: That sounds fun! I will help my mother in her garden. She wants to plant more vegetables before the rainy season begins.

Joy: That's nice! Maybe you can bring some vegetables to school and I'll share my chapati.

Winnie: Great idea! Let's have a mini picnic on Monday during lunch break. I can't wait!

12. Who promised to teach Joy how to make chapati?

- A. Winnie
- B. Grandfather
- C. Mother
- D. Grandmother

13. What was Winnie's mother planning to do over the weekend?

- A. Plant more vegetables
- B. Cook chapatis
- C. Water the vegetables
- D. Go shopping

14. Vegetables should be planted:

- A. After the rains have started
- B. When it starts raining
- C. Before the rains start
- D. Anytime

15. Winnie and Joy agreed to have a _____ on

Monday:

- A. Small feast
- B. Mini picnic
- C. Day out
- D. Vacation

Section D: Grammar and Vocabulary (Questions 16–30)

Fill in the blanks with the correct word.

16. My _____ is Joan.

- A. names
- B. naming
- C. name
- D. named

17. I _____ 10 years old.

- A. am
- B. is
- C. was
- D. are

18. I _____ my parents. Everyday after school, I remove weeds and water the vegetables.

- A. helps
- B. helping
- C. help
- D. helped

19. I help my parents _____ the garden.

- A. on B. to C. for D. in

20. I am _____ last born in my family.

- A. an B. a C. the D. is

Rewrite sentences with correct capital letters:

21. james went to nakuru in april

- A. James went to Nakuru in April

22. the girl named her cat daily

- A. The girl named her cat Daily

Use is, am, are, or an:

23. My mother _____ washing clothes.

- A. am B. are C. an D. is

24. I waited for him for _____ hour.

- A. an B. is C. are D. a

25. I _____ the last born in my family.

- A. are B. is C. am D. an

Write plural forms:

26. Mr. Kiptoo is a good farmer. He has many ox.

- A. oxes B. oxen C. oxs D. oxens

27. The women were very happy to see the governor.

- A. womans B. woman C. women D. men

Choose the correct word:

28. My class teacher is happy because _____ in my class is honest.

- A. somebody B. everyone C. nobody D. anybody

29. It was raining yesterday, _____ went out to play.

- A. nobody B. anybody C. somebody D. everybody

30. The cat slept _____ the tree.

- A. in B. for C. under D. over

SECTION E: COMPOSITION

Write an interesting composition about:

MY BEST TEACHER

COMPETENCE BASED EDUCATION

GRADE 4 2026

FORMATIVE ASSESSMENT

NAME: _____ ASSESSMENT NUMBER: _____


SCHOOL: _____ DATE: _____

Exceeding Expectation	Meeting Expectation	Approaching Expectation	Below Expectation	Total Score (%)

CREATIVE ARTS

TIME: 1 HOUR 40 MINUTES

1. A Grade 4 learner observed the type of lines drawn below.



Which type of line is it?

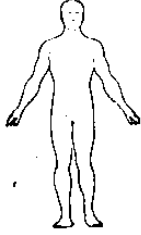
- A. Curved line B. Spiral line
C. Zigzag line D. Wavy line
2. Georgia was asked to draw a still life composition. She used all the following items **except**:
- A. Sharpener B. Drawing paper
C. Glue D. Pencil
3. Learners visited an artist making baby cots, hats, and mats. The artist used which technique?
- A. Tanning B. Carving
C. Weaving D. Modelling
4. The quality of colour that creates difference is called:
- A. Variation B. Smudging
C. Value D. Saturation

5. Grade 4 learners made a craft using the following materials **except**:




- A. Glue B. Crayon C. Paper D. Textas
6. During a school show, learners saw different types of puppets. Which one is **not** a puppet type they saw?
- A. Doll puppet B. Marionette
C. Glove puppet D. Rod puppet
7. When creating tonal variation on a cylindrical surface, what happens?
- A. It becomes darker
B. It becomes lighter
C. Colour changes to grey D. No colour change
8. Grade 3 learners did a collage. Which item did they use to stick eggshells?
- A. Crayons
B. Adhesives
C. Scissors
D. Pencils

9. The art of creating pictures by applying colours on a surface is called:
 A. Weaving B. Drawing
 C. Painting D. Modelling
10. John drew a human form during an art lesson.



Which element of art is being tested?

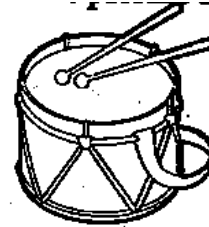
- A. Texture B. Proportion C. Depth D. Value
11. Grade 4 learners were asked to bring plastic straws, threads, needles, and beads. They were most likely going to make:
 A. Toy car B. Ball C. Necklace D. T-shirt
12. During crayon etching, a little soap is applied to help the paint:
 A. Dry B. Stick C. Cool D. Warm
13. Which woven item is shown in the diagram?



- A. Table mat B. Steel C. Basket D. Socks
14. Grade 3 learners visited a farm and saw different cows providing hides used to make the following **except**:
 A. Shield B. Hats C. Drum D. Cooking pan
15. Examples of impurities removed during clay preparation include all **except**:
 A. Water B. Stick
 C. Roots or plants D. Stones
16. A Grade 4 learner observed a drum. The hollow space inside the drum is called:
 A. Sling B. Skin membrane
 C. Thongs D. Resonator

17. During the Kenya National Music Festival, a performance by one person on stage is called:
 A. Solo B. Choral C. Group D. Class singing
18. When two or three voices are combined in singing, it is called:
 A. Unity singing B. Harmony
 C. Melody D. Pitch
19. During a folk dance preparation, which body part did learners **not** move?
 A. Shoulders B. Legs C. Waist D. Nails
20. When playing a descant recorder, which hygiene measure is **not** correct?
 A. Clean with warm water
 B. Avoid sharing
 C. Clear saliva
 D. Share always
21. The song "Tushangilie Kenya Taifa letu tukufu Kenya tunayoipenda Daima" is a:
 A. Lullaby
 B. Action song
 C. Topical song
 D. Patriotic song

22. The musical instrument shown is:



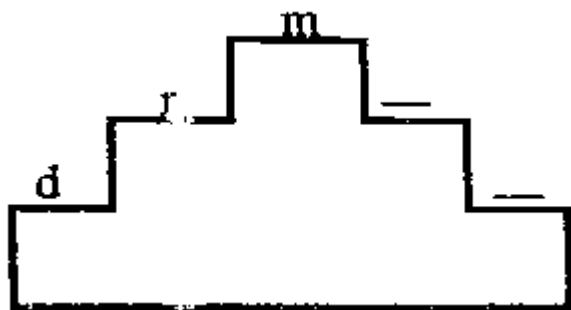
- A. Guitar B. Kayamba
 C. Bass drum D. Drum
23. Ways to tune a drum include:
 A. Tighten thongs and place under the sun
 B. Put in a cool place
 C. Loosen the thongs
 D. Thicken the drum
24. Every Sunday, Christians sing which type of song?
 A. Lullaby B. Sacred C. Action D. Pop
25. The element of speed in music is called:
 A. Pitch B. Dynamics C. Tempo D. Melody

26. The musical instrument shown is played by:



- A. Plucking B. Striking C. Blowing D. Hitting

27. Complete the solfa ladder:



- A. r, d B. F, d C. F, S D. r, t

28. Which of the following is **not** a component of a folk song?

- A. Dance B. Instrument
C. Flower D. Message

29. Jane collected items on a music nature walk: bottle tops, a Y-stick, a wire, and a nail. She was going to make:

- A. Descant recorder B. Drum
C. Shaker D. Bass drum

30. Songs are sung for all the following reasons **except**:

- A. Enjoyment B. Crying
C. Learning D. Sleeping

31. A Grade 4 learner identified a substance that promotes growth, provides energy, and maintains life. That substance is:

- A. Nutrient B. Balanced diet
C. Carbohydrates D. Meal

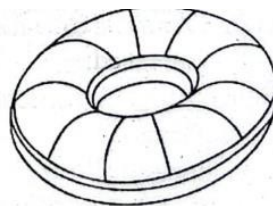
32. Choosing healthy foods helps in all the following **except**:

- A. Fight diseases easily
B. Recover muscles quickly
C. Provide nutrients for muscle development
D. Does not give energy for physical activity

33. Physical or mental energy needed to perform tiring activities for a long time is called:

- A. Stamina B. Flexibility
C. Endurance D. Strength

34. Learners used the device shown during swimming lessons.



It is called:

- A. Tyre B. Wheel C. Floater D. Parachute

35. Gymnastics is a physical activity that helps one become fit. Which is **not** an example of a gymnastic skill?

- A. Forward roll B. Backward roll
C. Side roll D. Head roll

36. In rounders, which of the following is an attacking technique?

- A. Battling B. Bowling
C. Gripping D. Hitting

37. Feelings of joy, pain, sadness, love, and anger are called:

- A. Adolescence B. Emotions
C. Moods D. Tension

38. After outdoor activities, learners sweat a lot. A healthy person needs to drink how many glasses of water daily?

- A. 6 B. 8 C. 7 D. 5

39. During standing, the starting position of one foot is slightly:

- A. Forward B. Backward C. Bent D. Under

40. A learner wants to play football but has no ball. She improvises one. What should she do after making it?

- A. Dirtify area
B. Dust area
C. Clean and clear area
D. Paint area

41. Being _____ in a game means respecting rules and players:

- A. Honest B. Fair C. Good D. Obedient

42. In rounders, the act of working together to achieve a common goal is called:
 A. Sportsmanship B. Togetherness
 C. Teamwork D. Unity
43. Willingness to give time and energy in games is called:
 A. Sacrifice B. Sportsmanship
 C. Fairness D. Leadership
44. During warm-up activities, learners did all **except**:
 A. Banana jump B. Star jump
 C. Calling the rain D. Breathing in and out
45. Volleyball passes: What is another name for bump pass?
 A. Dig pass B. Side pass
 C. Push pass D. Jump pass
46. The ball of the _____ is the position of the sole between the toes and arch:
 A. Nail B. Hand C. Leg D. Feet

47. In any game, the referee must be truthful and impartial. The referee is:
 A. Honest B. Dishonest
 C. Obedient D. Unfair
48. Grade 4 learners worked together in a game. The act of working together is called:
 A. Sportsmanship B. Togetherness
 C. Teamwork D. Unity
49. Football is played by how many teams?
 A. 6 B. 1 C. 2 D. 4
50. The diagram below shows a _____:



- A. Relay baton B. Stick
 C. Pipe D. Tissue roll

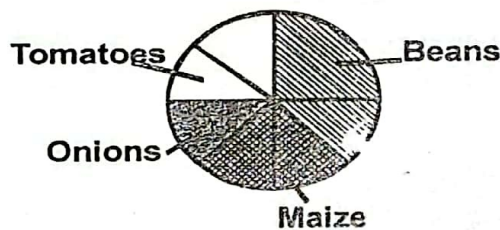
GOLDLITE SUPPLIES

HOLIDAY ASSIGNMENTS

Contact us on 0724351706

SET 2


1. Ouma deposited Sh 48236 in a bank. What is the total value of digit 8 in the amount deposited?
A. 800
B. 8000
C. 80
D. 8
2. A milk processing factory produced 8402 packets of milk. They sold 2643 packets. How many packets remained?
A. 5759
B. 5658
C. 5760
D. 5559
3. The figure below represents Mugenda farm. He planted the crops as shown below. Use fractions to describe parts of a whole farm.



What fraction of the farm represents beans?

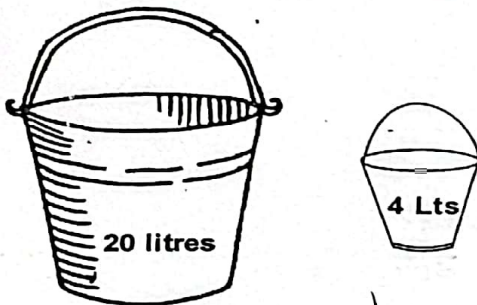
- A. $\frac{1}{8}$
B. $\frac{2}{8}$
C. $\frac{3}{8}$
D. $\frac{4}{8}$
4. Sixty nine oranges were packed in groups of three. How many groups were there?
A. 25
B. 24
C. 66
D. 23
5. Complete the pattern below.
21, 28, 35, 42, _____
A. 49
B. 48
C. 56
D. 45
6. During an election, Wafula got eight thousand, nine hundred and eighty nine votes. How many votes did he get in symbols?
A. 9089
B. 8989
C. 8909
D. 9898

7. Methu had the following notes.



How much amount was she having altogether?

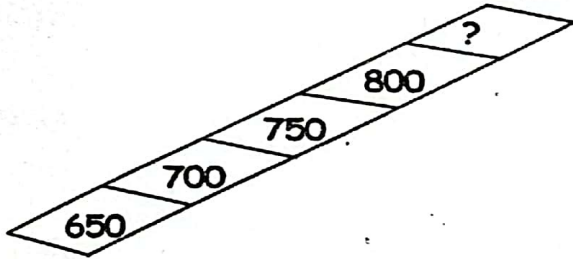
- A. Sh 800
B. Sh 750
C. Sh 900
D. Sh 850
8. Denis was asked to write the factors of 64. He wrote the following except
- A. 9
B. 16
C. 2
D. 8
9. Dorris scored 8548 points on her first game. On her second game her score increased by 172 points. How many points did she get altogether?
- A. 8376
B. 8976
C. 8720
D. 7320
10. Ndanu has two buckets of water as shown below.



How many 4 litre buckets can fill the 20 litre bucket?

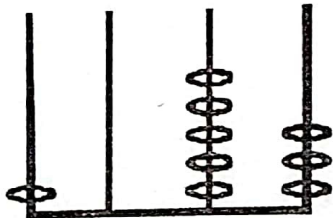
- A. 80
B. 5
C. 10
D. 8
11. A learner scored 79 marks in a test. What is the marks to the nearest ten?
- A. 71
B. 80
C. 70
D. 75
12. A trader has 869 cows. Write the number of cows in words.
- A. Eighty six nine
B. Eight six and nine
C. Eight hundred and sixty nine
D. Eighty sixty nine

13. Work out:- 70×10
- A. 700
B. 70
C. 710
D. 810
14. Mzee Hekima had 69 goats. He shared them among his four sons. Find out how many cows each son get and the remainder?
- A. 63 rem 4
B. 15 rem 11
C. 4 rem 7
D. 17 rem 1
15. Teacher Too draw a ladder of numbers as shown below.



Find the missing number in the ladder.

- A. 900
B. 850
C. 950
D. 100
16. What is a quarter of 32?
- A. 16
B. 8
C. 2
D. 4
17. Write $\frac{1}{3}$ in words.
- A. Three one
B. One over three
C. One and three
D. A third
18. Antony has Sh 56870 in her bank account. What is place value of digit 6?
- A. Thousands
B. Hundreds
C. Millions
D. Tens
19. If number one learner in a class is in the first position, what is the position of a learner number six?
- A. Sixteen
B. Six
C. Sixth
D. Sixty
20. Which number is represented by the abacus below?



- A. 3510
B. 1053
C. 153
D. 351


1. During a nature walk, Tobias a grade 4 learner used a _____ to hold a small insect he wanted to study,
 - A. gloves
 - B. apron
 - C. forceps
 - D. goggles
2. Selina a grade 4 learner was asked by her Science and technology teacher to write down the characteristic of animals. She wrote the following except:- All animals
 - A. die
 - B. lay eggs
 - C. breath
 - D. reproduce
3. Nelson s grade 4 learner took photos of the part of the plant shown below.



The part of the plant is

- A. leaf
 - B. fruit
 - C. flower
 - D. stem
4. Monicah a grade 4 learner, was seen wearing a heavy jacket. The weather was likely to be
 - A. wet
 - B. cold
 - C. dry
 - D. hot
5. Beatrice want to make dirty water safe for drinking. What should she do?
 - A. Decant the water
 - B. Filter the water
 - C. Drink it as it is
 - D. Boil the water
6. When a plant increases in size, height or length we say it has
 - A. removed waste
 - B. reproduced
 - C. grown
 - D. moved

7. The diagram below shows a protective equipment used when handling plants.



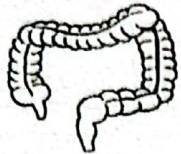
The protective equipment is called

- A. goggles
 - B. gloves
 - C. spectacles
 - D. sun glasses
8. William has reared the following animals on his farm. Which one cannot be reared at home?
 - A. Goat
 - B. Camel
 - C. Hyena
 - D. Dog
9. Karimi use heat in the following ways Which one is the odd one out?
 - A. For ironing
 - B. For drying
 - C. For cooking
 - D. For seeing objects
10. Animals with a backbone are called
 - A. living things
 - B. vertebrates
 - C. mammals
 - D. invertebrates
11. Grade 4 learners were told by their Science and technology teacher to share some of the photos taken during a nature walk using online platforms. They used all the following platforms except
 - A. television
 - B. whatsapp
 - C. instagram
 - D. facebook
12. The part of a computer drawn below is a



- A. mouse
 - B. C.P.U.
 - C. printer
 - D. keyboard

13. Allan saw the diagram below while using laptop.

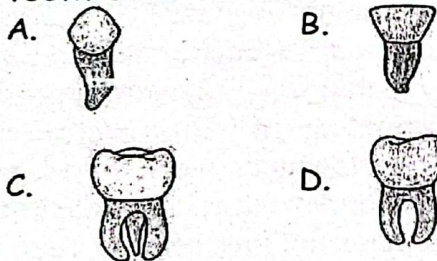


The part of the digestive system above is

- A. small intestines B. large intestines
C. stomach D. gullet
14. Jeremy, a grade 4 learner mentioned the part of a plant which removes excess water. The part he mentioned was
- A. leaves B. roots
C. stem D. flowers
15. Seth was asked to explain how waste old clothes in the school compound can be reused. What was his correct answer?

- A. Used as dusters
B. Keep chalks
C. Used as fuel
D. Plant flowers



16. Which of the following types of teeth shows a molar?



17. During an educational trip, Amos carried a camera. What would you expect him to use the camera for?

- A. Listening music
B. Show off to friends
C. Watch his favourite cartoons
D. Take photographs

18. A group of learners discussed the sources of light at home. They drew the sources. Which one was wrong?




19. What is the function of roots in plants?

- A. Eating the soil
B. Growing upwards
C. Making plant food
D. Absorbing water

20. The following practices help in maintaining a healthy digestive system. Which one does not?


- A. Healthy eating B. Dental hygiene
C. Constipation D. Deworming

21. Fred grows some crops in the kitchen garden as shown below.



He can grow _____ in the kitchen garden.

- A. vegetables B. tea
C. cotton D. oranges
22. To conserve water in the farm, Kombo should water crops using
- A. a basin B. a watering can
C. drip irrigation D. a bucket
23. Grade 4 learners were walking in their school vegetable seedbed. What did they wear to protect their feet?
- A. Mask B. Goggles
C. Gloves D. Gumboots
24. Kemunto is cooking sweet potatoes using the method of cooking shown below.



- Identify the method she is using
- A. stewing B. boiling
C. deep frying D. shallow frying
25. After harvesting, Josphine wanted to winnow her harvested grains. Which weather condition is most favourable for Josphine to winnow her grains?
A. Windy B. Rainy
C. Dry D. Calm
26. Grade 4 learners were asked to cut their nails regularly. What was the reason for that?
A. To look good
B. To make the teacher happy
C. To keep away germs
D. To eat well
27. A diet that gives our bodies all the nutrients needed is called
A. supper B. balanced diet
C. vitamins D. common meal
28. The picture shows a small wild animal.



The animal eats

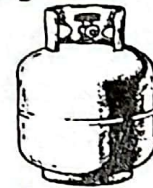
- A. chicken
B. fresh meat
C. sorghum seeds
D. sweet potatoes roots
29. A grade 4 learners mentioned examples of edible plants. Name the plant we eat it's leaves.
A. Tomatoes B. Sugarcane
C. Kales D. Potatoes
30. The diagram below shows a cleaning item used at home.



The item above is called a

- A. broom B. brush
C. duster D. mop

31. Which of the following materials is not needed when making compost manure?
A. Food remains B. Plastic bottles
C. Grass D. Maize stalks
32. Makena a grade 4 learner was passing near a farm and saw a farmer uprooting some plants and throwing them away leaving others. She became curious and asked the farmer. What he was doing. What answer did the farmer give?
A. Weeding B. Watering
C. Mulching D. Pruning
33. Sabina, a grade 4 learner ate an apple. An apple belong to which food group?
A. Proteins B. Carbohydrates
C. Body building D. Vitamins
34. Agnes uses the item shown below when cooking.



Which fuel does she use?

- A. Kerosene B. Charcoal
C. Gas D. Fire wood
35. Kenneth trapped a squirrel that used to damage his crops. What would you advice him to do with the squirrel?
A. Keep it as a pet
B. Slaughter and eat it
C. Gently release it in the environment
D. Kill it and give it to his dogs
36. Wanjiru wanted to cook eggs for breakfast. Apart from shallow frying. Which other method could she use?
A. Baking B. Boiling
C. Stewing D. Deep frying
37. Derick constructed the structure shown below



Identify the structure above.

- A. Puppet
- B. Doll
- C. Scarecrow
- D. Plant

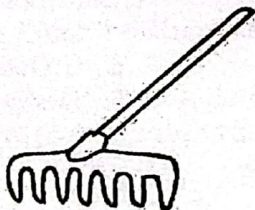
38. The structure above is used to
- A. decorate the farm
 - B. mark the farm boundary
 - C. entertain the farmer
 - D. scare away small wild animals
39. Njoroge practices drip irrigation in his farm. What is the importance of drip irrigation?
- A. It conserves water in the farm
 - B. It kill weeds in the farm
 - C. To keep wild animals away from the farm
 - D. To add nutrients in the soil
40. The picture below shows a domestic animal.



The animal provide us with

- A. wool
- B. transport
- C. meat
- D. milk

41. Removal of thin and weak seedlings to allow space for healthy growing seedlings is called
- A. transplanting
 - B. mulching
 - C. watering
 - D. thinning
42. The following are energy giving foods. Which one is not?
- A. Ugali
 - B. Cassava
 - C. Fish
 - D. Sweet potatoes
43. Identify the farm tool shown below.



- A. Spade
 - B. Rake
 - C. Panga
 - D. Jembe
44. Which of the following is not an important of compost manure?


- A. It is to make soil fertile
 - B. It protects plants against weeds
 - C. It conserves moisture
 - D. Add nutrients to the soil
45. Kibet cares for his crops by carrying out the activity shown below.



The above method is called

- A. cover cropping
- B. manuring
- C. pruning
- D. mulching

46. Henry ate food in the evening. The food he ate is called
- A. supper
 - B. breakfast
 - C. lunch
 - D. snack
47. Which of the following is not a personal item?
- A. Tooth brush
 - B. Tooth paste
 - C. Towel
 - D. Handkerchief
48. Aden keeps the animal shown below.



The animal is important to him because is provides

- A. milk
- B. security
- C. wool
- D. eggs

49. We can prevent soil erosion by
- A. cutting down trees
 - B. watering plants
 - C. planting trees
 - D. adding manure to the farm
50. Alice ate the food item shown below.

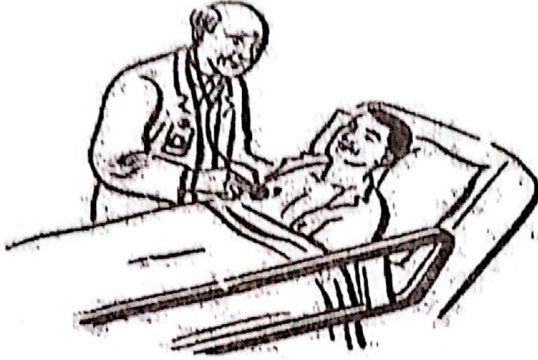


Which food group does the food belong?

- A. Vitamins
- B. Body building
- C. Energy giving
- D. Protective food

Soma mazungumzo haya kisha ujibu swali 1 hadi la 5.

(Lea amekuwa na maumivu ya mwili kisha akaamua kwenda hospitalini)



Lea: Salaam, aleikum daktari?
 Daktari: Aleikum salaam Lea, U hali gani?
 Lea: Vyema ila si vizuri sana. Unaponiona hivi. Leo, sijakula chochote kwa siku tatu.
 Daktari: Kweli waonekana mnyonge na mwenye udhaifu mwingi. Kando na kutokula unahisi vipi?
 Lea: Nimekuwa nikitapika pindi tu niwekapo chakula kinywani. Pia joto imekuwa jingi mwilini hasa wakati wa usiku.

Daktari: Je, umetumia dawa yoyote?

Lea: Ndio daktari. Nilinunua dawa ya malaria dukani.

Daktari: Ulijuaje kuwa unaugua malaria?

Lea: Nilikuwa nahisi baridi jingi sana.

Daktari: Ni makosa kununua dawa dukani bila kupata ushauri wa daktari.

1. Hizi zote zilikuwa dalili za ugonjwa wa Lea alizomweleza daktari isipokuwa
 A. kuwa na joto jingi mwilini
 B. kuvimba mwili
 C. kutapika
 D. kutokula chakula
2. Daktari aliona Lea akiwa
 A. mcheshi B. mchangamfu
 C. mzalendo D. mdhaifu
3. Mazungumzo haya yalifanyika wapi?

- A. Hospitalini B. Nyumbani
 C. Njiani D. Sokoni
4. Lea alikuwa mgonwa kwa siku ngapi?
 A. Mbili B. Saba
 C. Tatu D. Tano
5. Ushauri wa daktari kwa Lea ni
 A si vyema kutumia dawa wakati wowote
 B. kabla ya kununua dawa lazima apate ushauri kutoka kwa daktari
 C. joto jingi mwilini ni dalili ya malaria
 D. asiwe anatapika ovyo ovyo

Soma kisha kinachofuata kisha ujibu maswali 6 - 10.




Bwana Hekima ana shamba lake kubwa sana. Yeye hulima kwa kutumia trekta baada ya kufyeka kwa fyekeo. Bwana Hekima hawezi kutumia plau kwa sababu hana ng'ombe wa kuivuta.

Baada ya majuma mawili Bwana Hekima na wafanyikazi hupalilia kwa jembe na kutoa uchafu kwa reki. Bwana Hekima ananyunyizia maji shamba lake kutoka kwa bwana alilotengeneza shambani mwake. Mimea yake hunawiri sana na huwa rangi ya kijani kibichi.

6. Ni nini bwana Hekima hutumia kulima shamba lake?
 A. Jembe B. Trekta
 C. Fyekeo D. Plau
7. Bwana Hekima hutumia fyekeo kufanya nini?
 A. Kupalilia mimea
 B. Kukata mimea
 C. Kulima shamba
 D. Kufyeka
8. Bwana Hekima na wafanyikazi wake hupalilia baada ya muda gani?

- A. Wiki mbili B. Miezi miwili
 C. Mwaka mmoja D. Miezi saba
9. Kwa nini Bwana Hekima hawezi kutumia plau kwa kulima? Kwa sababu
 A. ana wafanyikazi
 B. shamba yake ni kubwa
 C. hana ng'ombe wa kuivuta
 D. ananyunyizia maji shambani
10. Bwana Hekima hunyunyizia maji mimea shambani kutoka wapi?
 A. Mtoni B. Ziwani
 C. Bwawani D. Mvua

Soma kifungu hiki kisha ujibu maswali 11 - 15.



Ndovu na mbwa walishika mimba kwa wakati mmoja. Miezi mitatu baadaye, mbwa alizaa vilebu sita. Miezi sita baadaye akashika mimba tena na baada ya miezi tatu akazaa papi dazeni moja. Hali hii iliendelea hivyo kwa muda. Baada ya miezi kumi na minane, mbwa alienda kwa ndovu na kumuuliza, "una hakika kweli una mimba? Tulishika mimba kwa wakati moja, siku

moja hasa. Unionavyo hivi nimezaa mara tatu lakini wewe ungali unatarajia kuzaa! Jamani kuna nini?"

Kwa utulivu, ndovu alimjibu mbwa, "kuna jambo muhimu unalipaswa kujua. Ninachobeba tumboni mwangu si kilebu, ni ndovu. Huwa ninazaa mara moja baada ya miaka miwili. Lakin mwanangu anapotua huu ulimwengu walimwengu hujua kweli nimezaa. Anapovuka barabarani, watu na magari husimama kumtazama kwa mshangao. Usikate tamaa unapoona wenzake wakipata baraka za haraka haraka usiwe na kinyongo eti baraka zako hazijaonekana. Wakati wako utafika na utakapofika utashangaa na kufurahia sana."

11. Ndovu na mbwa walishika mimba
 A. baada ya miezi sita
 B. siku moja
 C. kwa miezi sita
 D. baada ya miezi mitatu
12. Mbwa huzaa baada ya miezi mingapi?
 A. Kumi na minane B. Mmoja
 C. Mitatu D. Sita
13. Mbwa alizaa jumla ya vilebu wangapi kabla ndovu kuzaa?
 A. Kumi B. Kumi na wanane
 C. Sita D. Kumi na wawili

14. Kwa nini mbwa alienda kwa ndovu?
 A. Ndovu alikuwa bado hajazaa
 B. Ndovu alizaa mtoto mmoja
 C. Ndovu alikuwa amezaa
 D. Ndovu hakuwa na mimba
15. Ni funzo gani tunalopata kutokana na kisa hiki?
 A. Mbwa huzaa vilebu wengi kuliko ndovu
 B. Ndovu huheshimiwa
 C. Tunapaswa kuwa na subira maishani
 D. Ndovu hazai mara moja

Soma kifungu kifuatacho kina nafasi 16 hadi 20. Chagua jibu lifaalo zaidi kati ya yale umepewa.

Vumbi _____16_____ ni hatari kwa maisha _____17_____ watu na wanyama. _____18_____ viumbe ingawa wakati _____19_____ viumbe _____20_____ madhara hawatambui.

- | | | | | |
|-----|--------------|---------------|--------------|---------------|
| 16. | A. wengi | B. jingi | C. mingi | D. nyingi |
| 17. | A. cha | B. wa | C. za | D. ya |
| 18. | A. huwadhuru | B. huwatunza | C. huwakinga | D. huwatibu |
| 19. | A. mengine | B. ingine | C. nyingine | D. mwingine |
| 20. | A. inayopata | B. wanazopata | C. wanaopata | D. zinazopata |

Kutoka swali la 21 hadi 30, jibu maswali kulingana na maaqizo.

21. Tambua nomino katika sentensi inayofuata.

Sahani yangu imevunjika kabisa.

- A. kabisa B. sahani
C. imevunjika D. yangu

22. Ni nini kinyume cha juu?

- A. kando B. pale
C. yeye D. chini

23. Kamilisha sentensi hii.

Wazalendo wanaipenda nchi _____

- A. mwao B. yake
C. yao D. pao

24. Ni nini wingi wa:-

Mzee amenunua shamba.

- A. Wazee wamenunua mashamba
B. Vijana hwajanunua shamba
C. Mazee wamenunua shamba
D. Mzee amenunua mashamba

25. Jibu la alamsiki ni

- A. marahaba B. binuru
C. alamchana D. poa

26. Chagua kivumishi katika sentensi inayofuata.

Mapishi ya mama ni mazuri.

- A. mama B. mapishi
C. ni D. mazuri

27. Kamilisha kitendawili.

Nifunue nikufunike.

- A. Kiatu B. Leso
C. Mwavuli D. Ndege

28. Ni nini ukubwa wa neno mtoto?

- A. Toto B. Kitoto
C. Litoto D. Matoto

29. Je, nomino mama hupatikana kayika ngeli ipi?


- A. LI - YA B. KI - VI
C. I - ZI D. A - WA

30. Kanusha sentensi:-

Mama ameenda sokoni.

- A. Mama hakuenda sokoni
B. Mama hajaenda sokoni
C. Mama ataenda sokoni
D. Mama haendi sokoni

Read the following conversation and answer questions 1 - 5. For each blank space, select the best alternative from the choices given.



Teacher: ___1___ Shem. Did you finish your homework?

Shem: Good morning Sir. ___2___ I could not complete it.

Teacher: ___3___? You had enough time.

Shem: I had a bad fever last night. I was unable to study well.

Teacher: Okay but make sure you finish it by tonight.

Shem: ___4___ I will.

Teacher: And take care of your health too.

She: ___5___ sir.

- | | | | | |
|----|-------------|-------------------|-----------------|----------------|
| 1. | A. Hello | B. Good afternoon | C. Good morning | D. How are you |
| 2. | A. I'm fine | B. I'm sorry | C. I'm happy | D. I'm afraid |
| 3. | A. why not | B. what's up | C. how much | D. didn't you |
| 4. | A. wait sir | B. later sir | C. yes sir | D. no sir |
| 5. | A. Goodbye | B. Excuse sir | C. Pardon me | D. Thank you |

Read the passage below and answer questions 6 - 10.




Andrew and Harriet were wedding in August. The wedding preparations were almost complete when Tirus got an invitation card to travel abroad. Since there was no more time to prepare enough for the wedding day, all the preparations were done less than a weeks time.

Among the invited guests were neighbours, pastors and close relatives and a few friends. One the wedding day decorations were done with multi-coloured balloons. Andrew was in dark blue suit, purple shirt. Harriet had a matching dress, matching shoes and white feather on her hat.

6. Who got an invitation card to travel abroad?
 A. Harriet B. Andrew
 C. Titus D. Everyone
7. The bride was called
 A. Titus B. Andrew
 C. Harriet D. Parents
8. _____ were not invited in the wedding.

- A. Chiefs B. Pastors
 C. Relatives D. Friends
9. What was on Harriet's hat?
 A. Flower B. Balloon
 C. Ring D. Feather
10. The following colours are mentioned in the passage except
 A. white B. yellow
 C. blue D. purple

Read the passage below and answer questions 11 - 15.



Many trees lived together in a forest but one tree looked different. It had a bent and twisted trunk. The crooked tree felt sad. It thought, "I look so ugly." All the other trees are beautiful and straight.

One day, a wood cutter came to the forest. He looked at all trees and said, I will only cut the straight trees. That crooked tree is useless to me. "So, the wood cutter cut down all the straight trees. He did not touch the crooked tree. Now the crooked tree was happy. It was spared because it was different.

11. How was the one tree different from the others?
 A. It was short
 B. It was very ugly
 C. It was beautiful
 D. It was strong
12. Which word has been used in the passage to mean the opposite of straight?
 A. Rough B. Horizontal
 C. Spiral D. Crooked
13. The word "useless" is used in the passage, which other word can be used instead of useless?

- A. Unusable B. Valuable
 C. fruitful D. ugly
14. What moral lesson do we learn from the story?
 A. Always compare yourself
 B. Never talk to strangers
 C. It is good to complain
 D. Be happy with your looks
15. According to the passage, it is true to say that
 A. A wood cutter cut all the trees in the forest
 B. All the trees were crooked
 C. Only one tree was straight
 D. The crooked tree was spared

Read the passage below. It contains blank spaces numbered 16 to 20. For each space, select the best alternative from the choices given.

We should never ___16___ to brush our ___17___ at least twice daily. This ensures we do not ___18___ from tooth decay ___19___ cavity. Our fingernails and toe nails should also be ___20___ short. This ensures they are always clean.

- | | | | | |
|-----|------------|------------|------------|-------------|
| 16. | A. forget | B. abandon | C. keep | D. remember |
| 17. | A. teeths | B. tooths | C. teeth | D. tooth |
| 18. | A. catch | B. suffer | C. endager | D. contract |
| 19. | A. but | B. then | C. and | D. or |
| 20. | A. cutting | B. cut | C. cuts | D. cuted |

For question 21 to 25, choose the best alternative from the choices given to complete the sentences.

21. This sharpener belongs to Shadrack. It is _____
A. he B. him
C. hers D. his
22. The school _____ has a television inside for children to watch.
A. van B. fan
C. pan D. fun
23. We have been waiting for _____ hour.
A. an B. a
C. the D. that
24. There _____ a lot of traffic on my street yesterday.
A. is B. are
C. was D. were
25. We have learnt _____ rules on good manners.
A. a lot B. little
C. a lot of D. much

For question 26, complete the sentence correctly.

26. Aunt is to uncle as _____ is to nephew.
A. niece B. cousin
C. mother D. girl

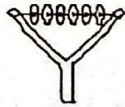
For question 27 and 28, write the plural of the underlined words.

27. Mr. Onduso is a good farmer. He has an ox.
A. oxs B. oxen
C. oxes D. oxens
28. The woman was very happy to see the president.
A. women B. men
C. womans D. women

For question 29 and 30, choose the opposite of the words given.

29. Cheap
A. new B. big
C. deep D. expensive
30. Defeat
A. pass B. win
C. victory D. fail

- Sam made a string instrument during a practical lesson. He would play the instrument by
 - blowing
 - hitting
 - plucking
 - beating
- Sarah collected some sisal fibres for a practical activity. What did she want to make?
 - rope
 - doll
 - ball
 - bag
- Ben drew a picture of the musical instrument shown below.



What did he use to draw the picture?

- A nail
 - A brush
 - A stick
 - A pencil
- Teacher Selina used a picture shown below to explain a type of balance in gymnastics.



What was she explaining?

- Crab balance
 - Swan balance
 - Single foot balance
 - Wheelbarrow balance
- Kerubo was heard singing the song below.

"Lala mtoto lala
Lala mtoto lala
Mama anakuja lala
Akupe maziwa lala"

 Kerubo was singing a _____
 - lullaby song
 - sacred song
 - patriotic song
 - folk song

- Grade 4 learners were playing football. State one way they would play the ball.
 - Pushing
 - Kicking
 - Pulling
 - Jumping
- Joel made a 2D piece of art using wood. This is called
 - pottery
 - painting
 - drawing
 - carving
- The Kenya National flag has all the following colours except
 - green
 - yellow
 - white
 - black
- Identify the kodaly hand sign shown below.



- s
 - f
 - d
 - m
- In a game, players from the opposing team are referred to as
 - colleagues
 - opponents
 - friends
 - companions
 - Grade 4 learners improvised the item shown below.




The item is worn around the

- neck
 - waist
 - elbow
 - leg
- During sports day, learners were taught to keep safe distance while running. What was the reason for that?
 - Have fun
 - Look neat
 - Avoid injuries
 - Finish faster

13. In music, how can grade 5 learners tell that one sound lasts longer than another? By its
- A. speed B. pitch
C. duration D. loudness

14. Chalton drew the picture shown below from observation.

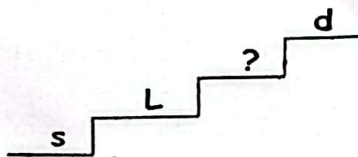


Which technique was used to create tone?

- A. Smudging
B. Collage
C. Montage
D. Imaginative drawing
15. Grade 4 learners made items using clay. They made the following items except
- A. pots B. bowls
C. vases D. wallets
16. What is the French rhythmm name of the note shown below?



- A. Ta - te B. Taa
C. Taa- aa D. Ta-fa-te-fe
17. Sharon leads grade 5 learners while performing folk dance. Sharon is likely to be a
- A. dancer B. singer
C. drummer D. soloist
18. Identify the missing solfa note.

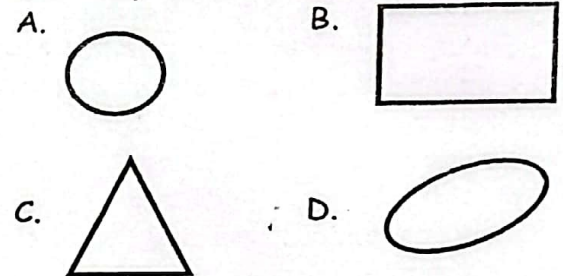


- A. d B. f
C. t D. m

19. Grade 4 learners mixed yellow and blue colour in equal measure during a painting lesson. Which colour did they obtain?

- A. Green B. Purple
C. Orange D. Red

20. Grade 4 learners were asked by their Creative Arts teacher to draw the athletic field. Which shape below did they draw?



21. During sprint start technique, an athlete follow the following commands. The last command is

- A. set
B. go
C. onto your marks
D. run

22. Kola was asked to name examples of percussion instruments. Which one among the following was wrong?

- A. Shakers
B. Drum
C. Kayamba
D. Descant recorder

23. Terry a grade 4 learner drew a picture and shaded it using the technique shown below.



Identify the technique he used.

- A. Smudging B. Shading
C. Painting D. Printing

24. Masila was improvising a ball. He used the following materials except

- A. nylon papers B. nails
C. old clothes D. sisal fibres

25. Teacher Norah took her grade 4 learners for an outdoor lesson to play netball game. What were they supposed to do before playing the game?
- To dance
 - To cool down activities
 - To sing
 - To Warm up activities
26. Grade 4 learners presented a folk song during the school prize giving day. They used different percussion instrument one of them being a drum that produced sound by
- shaking
 - blowing
 - striking
 - hitting
27. Grade 4 learners were seen carrying the items shown below during an outdoor lesson.



What material was not used?

- String
 - Old clothes
 - Stones
 - Old polythene papers
28. Wafula want to cut picture from old newspapers to make montage picture. Which of the following tools he can use to cut the pictures?
- Pencil
 - Scissors
 - Sharpener
 - Brush
29. Below is an example of a percussion instrument.



The part marked M is the

- tuning lace
- membrane
- sling
- sound box

30. The technique of creating pictures by applying paints on dry surfaces while using a brush is called
- brushing
 - drawing
 - painting
 - modelling
31. Annet wanted to paste his artwork. Which of the following is an adhesive material she used?
- Soda
 - Water
 - Mud
 - Glue
32. Naomi was asked by her Creative Arts teacher to draw a minim. Which of the following notes represents her drawing?
- -
 -
 -
33. Sophia was practising a skill they learnt in the game netball as shown below.



- Which technique was she practising?
- Chest pass
 - Underarm pass
 - Overarm pass
 - Overhead pass
34. Which part of the body is mostly used when playing netball?
- Chest
 - Hands
 - Legs
 - Head
35. Grade 4 learners mixed different colours during their painting lesson. Which of the following items was required for mixing colours?
- Crayon
 - Pencil
 - Glue
 - Palette
36. Which group of colours below consists of primary colours only?
- Green, orange, purple
 - Red, yellow, green
 - Red, yellow, blue
 - Blue, black, orange

37. Wesonga warmed a drum near fire before playing it. What was the reason for warming the drum?
 A. To make it new
 B. To make it warm
 C. To tune it
 D. To clean it
38. Singing the National Anthem encourage all the following except
 A. love
 B. peace
 C. unity
 D. hatred
39. John added black colour to his green colour and it turned
 A. lighter
 B. darker
 C. duller
 D. shinier
40. During a football game, Momanyi controls the match in progress. Momanyi is likely to be a
 A. referee
 B. coach
 C. captain
 D. manager
41. Grade 4 Creative Arts teacher drew the following musical instrument and asked the learners to identify it.



Who gave the correct answer?

- A. Stacy - drum
 B. Kemunto - flute
 C. Musa - fiddle
 D. Stanley - shaker
42. Grade 4 learners were asked to make charcoal sticks. They needed the following materials except
 A. dry soil
 B. green sticks
 C. source of fire
 D. metal tin
43. The percussion instrument below is called Isukuti.




The instrument comes from which community in Kenya?

- A. Luo
 B. Luhya
 C. Nandi
 D. Agikuyu
44. A teacher gave the following instructions before the game. Which one was wrong?
 A. Warm-up before the game
 B. Wear the right attire
 C. Clean the obstacles in the field
 D. Do not follow the teachers instruction
45. The equipment shown below is used in which game?

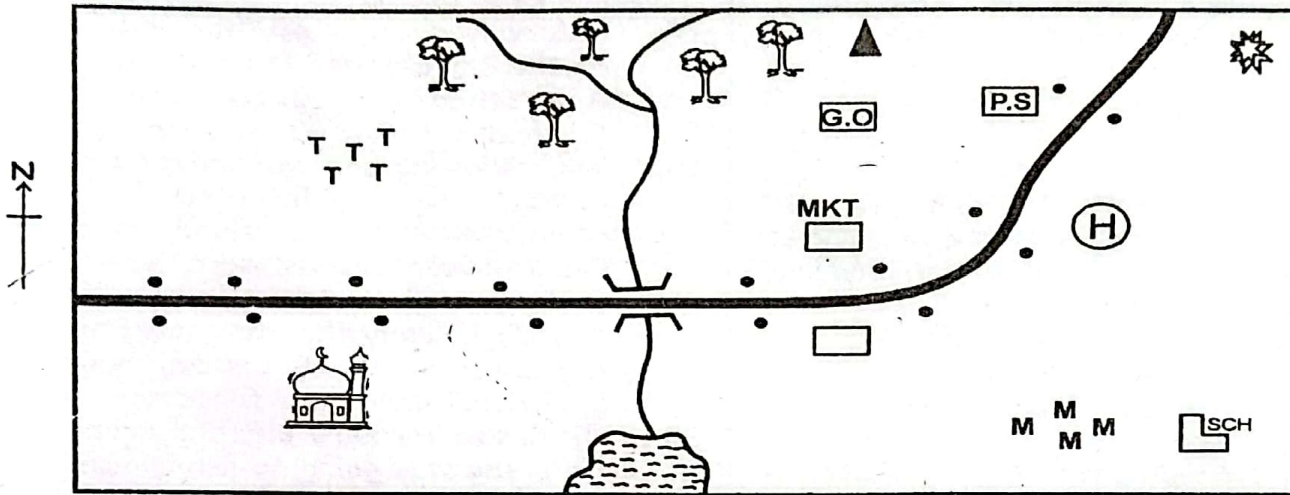


- A. Rounders
 B. Netball
 C. Football
 D. Volleyball
46. Loise, a grade 4 learner drew a drum and named it's parts. Which part is hit to produce sound?
 A. Resonator
 B. Membrane
 C. Slig
 D. Skin
47. The Kenya National Anthem is an example of which type of song?
 A. Patriotic
 B. Topical
 C. Sacred
 D. lullaby
48. The musical instrument shown below is played by



- A. hitting
 B. bowing
 C. shaking
 D. blowing
49. Grade 4 learners wanted to improvise a skipping rope. Which technique did they apply while improvising the item?
 A. Carving
 B. Modelling
 C. Twisting
 D. Drawing
50. Before diving into a swimming pool, it is advisable to check the
 A. depth
 B. colour
 C. width
 D. length

META AREA



Key

Forest	P.S. Police station	Tarmac road	Mosque
Settlements	M M Maize	Hill	School
Hospital	Quarry	River & Bridge	TTT Tea plantation
G.O Governor's Office	MKT Market		

Use the map of Meta area to answer questions 1 - 6.

- The people of Meta area are likely to be
 A. christians B. muslims
 C. pagans D. traditionalists
- Meta area is likely to be a
 A. ward B. location
 C. county D. sub-county
- What is the direction of the hill from the quarry?
 A. South B. West
 C. North D. East
- Which economic activity is practised in the quarry?
 A. Mining B. Farming
 C. Fishing D. Tourism
- Which food crop is grown in Meta area?

- Tea
 - Coffee
 - Cotton
 - Maize
- What shows there is security in Meta area?
 A. The hospital
 B. The market
 C. The governor office
 D. The police station
- Our national flag has four colours. Which colour stand for our people?
 A. Red B. Black C. Green D. White
- Grade 4 Social Studies teacher drew the diagram below and asked the learner to identify it.



- They said that it was a
- compass direction
 - map
 - bridge
 - hill
9. Lilian visited her grandmother in the rural area and found her harvesting yams, cassava and sweet potatoes. These are examples of
- foreign crops
 - cash crops
 - indigenous crops
 - commercial crops
10. Simiyu a grade 4 learner saw a raised land higher than a hill. Which physical feature would be that?
- Plateau
 - Mountain
 - Lake
 - River
11. Grade 4 learners learnt about physical features found in their county. Which one is not a physical feature?
- Mountains
 - Rivers
 - Bridges
 - Hills
12. Carrying of goods and people from one place to another is called
- migration
 - settlement
 - population
 - transport
13. Jack keeps chicken in his farm. The kind of farming practiced by Jack is called
- beef farming
 - dairy farming
 - poultry farming
 - cash crop farming
14. During a Social Studies lesson, Amanda saw the road sign shown below in her text book.




- The road sign above shows
- bump ahead
 - no entry
 - slippery road
 - danger road
15. Rivers and lakes are important in our county because they provide us with
- food
 - shelter
 - water
 - soil

16. Sonia lives in a place with many people. A place with many people is said to be
- low populated
 - sparsely populated
 - densely populated
 - linear populated
17. The daily changes of the conditions of the atmosphere is known as
- weather
 - rainfall
 - climate
 - temperature
18. The following are cash crops except
- tea
 - cotton
 - coffee
 - maize
19. Grade 4 learners visited an area set aside by a government for wildlife only. It is likely that they visited a
- museum
 - historic built
 - national park
 - forest
20. Njoki saw farmers planting crops while she was going to school. In which season do farmers plant their crops?
- Wet season
 - Rain season
 - Dry season
 - Hot season
21. The following are ways of caring for historic environments. Which one is not?
- Repairing them
 - Using them as hideouts
 - Cleaning them
 - Repainting them
22. When singing our national anthem, we should
- close our eyes
 - sing happily and clap our hands
 - sing loudly and dance
 - stand at attention
23. John went to the lake and saw the activity taking place in the diagram below.



- Which economic activity was taking place?
- Fishing
 - Mining
 - weaving
 - farming

24. Wamalwa grows crops and keep animals in his farm. We can say that Wamalwa is a
 A. fisherman B. trader
 C. farmer D. doctor
25. Grade 4 learners are planning to visit a place where things of the past like pots, gourds, traditional spears and arrows are kept. Which of the following areas are they likely to visit?
 A. Museum B. Game park
 C. Hotel D. Tourism
26. Linah visited her grand parents in rural areas and found the type of settlement shown below.



- The type of settlement above is
 A. scattered B. clustered
 C. nuclear D. linear
27. Members of the county assembly represents an area called
 A. county B. ward
 C. location D. constituency
28. Grade 4 learners were discussing about counties in Kenya. Kenya is divided into how many counties?
 A. 22 B. 37
 C. 47 D. 52
29. Grade 4 learners were asked by their Social Studies teacher to use digital devices to search more information on the historic built environments found in their county. They used all the following digital devices except
 A. a tablet
 B. text book
 C. a laptop
 D. a computer
30. Integrity, trust, honest and respect are examples of a school
 A. routines
 B. mottos
 C. core-values
 D. time tables

C.R.E.

31. In Genesis stories of creation, God created us in his own image and
 A. likeness
 B. happiness
 C. power
 D. beauty
32. Diana a grade 4 learner was asked by her CRE teacher to list members of nuclear family. Which one was wrong?
 A. Uncle B. Father
 C. Brother D. Mother
33. According to Genesis 20:12, children should _____ their parents.
 A. hate B. disobey
 C. obey D. abuse
34. Mark a grade 4 learner tells the truth always. We can say that Mark is
 A. obedient B. honest
 C. kind D. patient
35. During the healing of the lepers by Jesus, how many lepers were healed?
 A. Nine B. One
 C. Five D. Ten
36. Grade 4 learners were asked their CRE teacher to say how they should handle the Bible with respect. What did they say?
 A. By folding its papers
 B. By writting on it
 C. By keeping it safe and clean
 D. Bu making it dirty
37. God created the world and everything in it for _____ days.
 A. seven B. six
 C. eight D. four
38. Every Sunday Naomi bakes cakes and gives them to Sunday school children after church. We can say that Naomi is
 A. selfish B. proud
 C. careless D. kind
39. Many people followed Jesus to receive miracles of healing. Jesus required them to have one important thing to receive their miracles. What was that?
 A. Faith B. Money
 C. Respect D. Love

40. People were not happy when Jesus entered Zacchaeus house because he was a
 A. priest B. tax collector
 C. sinner D. shortman
41. After watching a video on the story of Moses, your teacher asked you to give a lesson learnt from the call of Moses. Which one is it?
 A. God is not responsible
 B. God hates his people
 C. We should obey God's call
 D. We should be very rich
42. John the baptist prepared people for the coming of the messiah by talking to them to
 A. go to church
 B. give their tithes
 C. worship God
 D. respect their sins
43. Human beings are described as God's special creation because
 A. God gave them power to rule over the earth
 B. God made them in His own image and likeness
 C. God created them using soil
 D. God commanded them to multiply
44. The first four disciples of Jesus were
 A. doctors
 B. fishermen
 C. tax collectors
 D. carpenters
45. Davis a grade 4 learner is a prefect. He writes the noise makers but spares his best friend Brian. What does Davis lack?
 A. Patience B. Humility
 C. Self-control D. Fairness
46. The first book in the New Testament is
 A. Genesis B. Luke
 C. Matthew D. John
47. When someone accepts their mistakes and asks for forgiveness, we say he or she has
 A. repented B. forgiven
 C. sinned D. accepted
48. Jesus told Nicodemus that no one could enter the kingdom of God without
 A. wealth

- B. being kind
 C. love
 D. being born again
49. Terry, your classmate lost your pen. As a christian, what should you do?
 A. Fight him
 B. Forgive her
 C. Report her to your parents
 D. Ask her to pay you
50. Christians celebrate the resurrection of Jesus during
 A. Easter B. christmas
 C. pentecost D. mashujaa day

I.R.E.

1. The Holy quran was revealed in which language?
 A. Hebrew B. Arabic
 C. English D. Kiswahili
2. The last surah of the quran is
 A. Nas B. Fatiha
 C. Ikhlas D. Falaq
3. A muslim ends prayer by saying
 A. salaam B. takbir
 C. ameen D. tasbih
4. The total number of rakkats that a muslim should perform in a day is
 A. 5 B. 16 C. 19 D. 17
5. When a muslim child is born we celebrate
 A. Eid B. Juma
 C. Aqiqah D. Milad in Nabii
6. Angel, Holy book, prophets and the last day are pillars of
 A. religion B. iman
 C. islam D. insaan
7. Taurat is the book given to prophet
 A. Musa B. Daud
 C. Issa D. Ibrahim
8. The best time to recite surahs Falaq and Naas is
 A. before entering toilet
 B. before mixing with people
 C. before sleep
 D. Before going to mosque
9. The holy city of the prophet (SAW) is
 A. Madinah B. Egypt
 C. Makkah D. Taif
10. The holy quran was revealed in the month of
 A. shawwal B. muharam
 C. ramadhan D. dhul-hijjah