

GOLDLITE SUPPLIES
HOLIDAY ASSIGNMENTS
Contact us on 0724351706

ALL SUBJECTS COMBINED

GRADE 3 2026

FORMATIVE ASSESSMENT

NAME: _____ **ASSESSMENT NUMBER:** _____

SCHOOL: _____ **DATE:** _____

Exceeding Expectation	Meeting Expectation	Approaching Expectation	Below Expectation	Total Score (%)

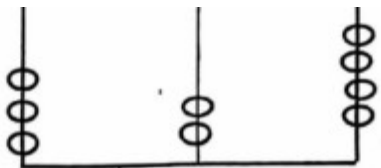
MATHEMATICS ACTIVITIES
TIME: 1 HOUR 30 MINUTES

Number and Position

1. Name the position of the ball from the order of the objects starting from a tree: _____



2. Use the abacus below to represent the number:



1. 4 hundreds, 2 tens, 7 ones: _____

2. Write the missing numbers:

421, 426, 431, 436, _____, _____

Add

3. 474

$$\begin{array}{r} 474 \\ + 52 \\ \hline \\ \hline \end{array}$$

4. A farmer had 261 cows. He bought 37 more. How many cows does he have altogether?

Subtraction

5. John had 450 dogs. 120 dogs died. How many dogs were left? _____

6. Subtract 64 from 594 = _____

7. Take away 69 - 8 = _____

Multiplication and Division

8. Multiply 9 by 4 = _____

9. Complete the multiplication sentence :

$$\begin{array}{ccc} \bigcirc & \bigcirc & \\ \bigcirc & \bigcirc & \\ \bigcirc & \bigcirc & \end{array} \times \begin{array}{ccc} \bigcirc & \bigcirc & \\ \bigcirc & \bigcirc & \\ \bigcirc & \bigcirc & \end{array} =$$

_____ x _____ = _____

10. $8 \times 4 =$ _____

11. Share 36 oranges among 6 boys. How many oranges does each boy get? _____

12. Mother had 25 sweets. She gave her son to share with his five friends. Each friend got _____ sweets.

13. $40 \div 5 =$ _____

Fractions and Shapes

14. Draw a circle and shade a half.

15. Moses had 12 cars. He shaded 6 cars with red colour. What fraction of the cars were shaded?

16. A quarter of 20 is _____

Word Problems

17. Ray had 124 litres of water. His mother used 52 litres to wash dishes. How many litres of water were left in the sufuria? _____

18. How many half litres can fill a bucket of 10 litres? _____

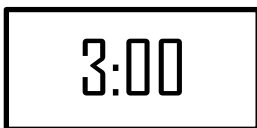
19. $89 \text{ metres} - 12 \text{ metres} =$ _____

20. In grade 3, girls were skipping with a 67-metre rope. 27 metres were cut by boys. How many metres of rope were left? _____

Comparisons and Time

21. Which is larger, a window or a classroom door? _____

22. Look at the clock below.



What is the time? _____

23. What is the time in the clock below?



24. What time do you go to school? _____

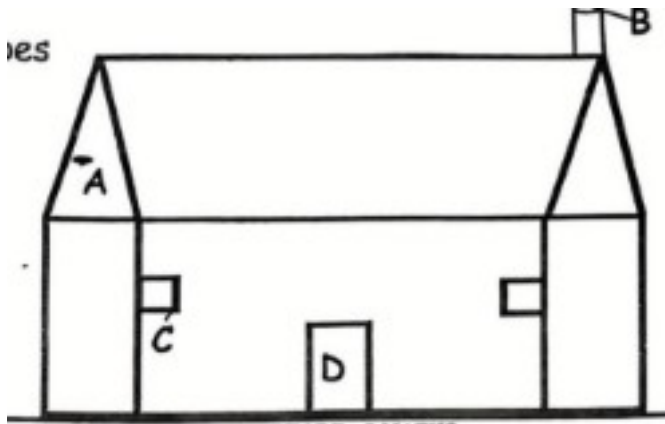
Money

25. What is the total amount?



26. What is the shape of Ksh 100 note? _____

27. Name the shapes:



- A. _____
- B. _____
- C. _____
- D. _____

ELIMU MSINGI KWA MISINGI YA UMAHIRI

GREDI 3 2026

TATHMINI ENDELEVU

JINA: _____ NAMBARI YA TATHMINI: _____

SHULE: _____ TAREHE: _____.

Kuzidisha matarajio	Kufikisha matarajio	Kukaribia matarajio	Chini ya matarajio	Jumla (%)

SHUGHULI ZA KISWAHILI

MUDA: SAA 1 DAKIKA 40

A: KUSIKILIZA NA KUZUNGUMZA

Mwalimu amsalimie mwanafunzi kisha amwambie: *"Nitakuuliza maswali nawe utayajibu kwa Kiswahili."*

1. Dukani ni wapi? _____ (Mwanafunzi Ajibu)
2. Muuzaji ni nani? _____ (Mwanafunzi Ajibu)
3. Mununuzi ni nani? _____ (Mwanafunzi Ajibu)
4. Taja bidhaa mbili zinazopatikana dukani. _____ (Mwanafunzi Ajibu)

B: KUSOMA KWA SAUTI

Soma kifungu hiki kwa sauti:

"Daudi alikuwa mwanajeshi. Yeye alipenda nchi yake sana alihakikisha kuwa nchi yake ina amani. Hakupenda watu wagombane kila wakati. Aliwafunza watu kupendana na kuwa na amani. Rais wa nchi yake alimpa zawadi kwa kazi yake nzuri."

C: SARUFI

Jaza pengo:

1. R__di__

2. D ___ kt ___ ri
3. J ___ ni
4. Ny ___ k ___ ndu
5. Kit ___ bu

Tunga sentensi ukitumia maneno haya:

6. Kalamu _____
7. Dhahabu _____
8. Panda _____
9. Kimbia _____
10. Bendera _____

Jaza pengo ukitumia "yule" au "wale":

11. Mwanafunzi _____ hutayarisha kitabu chake mapema.
12. Polisi waliwakamata wezi _____.
13. Walimu _____ walihudhuria sherehe ya pasaka.
14. Alipigiwa makofi kwa kusaidia babu _____.
15. Mwenyekiti _____ ndiye aliyenisaidia.

D: UMBO LA WINGI

Andika kwa umoja au wingi:

14. Mzazi _____
15. Dimma _____
16. Kikombe _____
17. Wanafunzi wanaimba _____
18. Kuku alikula chakula _____
19. Kiti kimevunjika _____

E: KUTUNGA MANENO

Chora:

20. Kitabu	21. Jembe

Unda maneno ukitumia silabi:

22. Pa _____
23. Ko _____
24. Ka _____
25. Cho _____

Andika kwa maneno au nambari:

26. 40 _____
27. Kumi na tano _____
28. 57 _____
29. Sabini _____
30. 37 _____

F: USOMAJI WA HADITHI NA MASWALI

Soma hadithi kisha ujibu maswali:

"MCHEZAJI HODARI

Onana alikuwa mchezaji hodari. Alicheza karibu na uwanja wa Kassam. Alicheza kwa bidii. Wachezaji wengine walimpenda sana. Kila siku asubuhi na mapema anaamka kwenda uwanjani."

31. Onana alikuwa nani? _____
32. Kila siku aliamka kwenda wapi? _____
33. Alichezea uwanja wa nani? _____
34. Wachezaji wengine walimpenda kwa nini? _____
35. Kichwa cha hadithi hii ni _____

G: KUANDIKA

Andika sentensi tano kuhusu RAFIKI YAKO:

1. _____.
2. _____.
3. _____.
4. _____.
5. _____.

COMPETENCE BASED EDUCATION

GRADE 3 2026

FORMATIVE ASSESSMENT

NAME: _____ **ASSESSMENT NUMBER:** _____

SCHOOL: _____ **DATE:** _____.

Exceeding Expectation	Meeting Expectation	Approaching Expectation	Below Expectation	Total Score (%)

ENVIRONMENTAL ACTIVITIES

TIME: 1 HOUR 30 MINUTES

ENVIRONMENTAL ACTIVITIES

1. The room where we sleep is called _____
2. Name two things found in the bedroom:
 - a. _____
 - b. _____
3. Name two materials used as beddings
 - a. _____
 - b. _____
4. _____ is used to cover a mattress to prevent it from urine (Mackintosh, blanket)
5. Name two causes of bedwetting:
 - a. _____.
 - b. _____.
6. _____ is the first meal of the day (Lunch, Breakfast)


Food groups:

7. At supper, mother prepared the following food. Match the food and its food group:

Food	Energy Giving	Body Building	Protective Food
Ugali			
Fish			

Kales/Apple			
-------------	--	--	--

8. Name three types of foods we get from the shamba:



9. Draw and name two materials that can be improvised to clean kitchen utensils:

--	--

True or False:

10. Urinals are only used by girls. _____

11. Toilets should not be kept clean. _____

12. Which of the following statements is true?

a. Clean water is safe for drinking.

b. We can make water clean by filtering.

13. Name three dangerous places in the community:

a. _____


b. _____

c. _____

14. Name three safe places in the community:









15. People who walk on foot are called _____ (motorists, pedestrians, cyclists)

Traffic lights:

- | | |
|-----------|-----------|
| 16. Red | Get Ready |
| 17. Amber | Go |
| 18. Green | Stop |

COMPETENCE BASED EDUCATION

GRADE 3 2026

FORMATIVE ASSESSMENT

NAME: _____ **ASSESSMENT NUMBER:** _____

SCHOOL: _____ **DATE:** _____.

Exceeding Expectation	Meeting Expectation	Approaching Expectation	Below Expectation	Total Score (%)

CRE ACTIVITIES

TIME: 1 HOUR 30 MINUTES

1. I am fearfully and _____ made.
2. Father, mother, and children make a _____ (extended, nuclear) family.
3. Adam and Eve lived in the garden of _____
4. _____ disobeyed God. (John, Jonah)
5. Name the first two books of the New Testament:
 - a. _____,
 - b. _____
6. _____ had a skin disease. (Naaman, Eli)
7. _____ lived with priest Eli. (Samson, Samuel)
8. _____ saw the burning bush. (Moses, Noah)
9. Obeying our parents means showing them _____ (respect, disrespect)

COMPETENCE BASED EDUCATION

GRADE 3 2026

FORMATIVE ASSESSMENT

NAME: _____ **ASSESSMENT NUMBER:** _____

SCHOOL: _____ **DATE:** _____.

Exceeding Expectation	Meeting Expectation	Approaching Expectation	Below Expectation	Total Score (%)

IRE ACTIVITIES

TIME: 1 HOUR 30 MINUTES

1. Recite Surah Ikhlas. (3 marks)

2. The pillars of Iman are _____

3. Surah Al Masad has _____ verses.

4. Belief in the Day of Judgement is the _____ pillar of Iman. (1 mark)

5. Angel _____ will be ordered to blow the trumpet. (Jibril, Israfil, Izrail)

6. Tick the deeds that will make us go to Jannah (3 marks):

a. Reading the Quran

b. Telling lies

c. Disobeying parents

COMPETENCE BASED EDUCATION

GRADE 3 2026

FORMATIVE ASSESSMENT

NAME: _____ **ASSESSMENT NUMBER:** _____

SCHOOL: _____ **DATE:** _____.

Exceeding Expectation	Meeting Expectation	Approaching Expectation	Below Expectation	Total Score (%)

CREATIVE ARTS ACTIVITIES

TIME: 1 HOUR 30 MINUTES

1. Name these objects which can be pulled:



2. We can push a _____ (stone, wheelbarrow, bicycle)

3. We can make drawings on a book by use of a _____ (pen, crayon, stick)

4. When skipping we use a _____

5. Name the method used to create the rhythm: _____



6. We use _____ (different, one, black) types of material when making collage

7. Name two materials that can be used in making collage:

a. _____

b. _____

COMPETENCE BASED EDUCATION

GRADE 3 2026

FORMATIVE ASSESSMENT

NAME: _____ **ASSESSMENT NUMBER:** _____

SCHOOL: _____ **DATE:** _____.

Exceeding Expectation	Meeting Expectation	Approaching Expectation	Below Expectation	Total Score (%)

**ENGLISH ACTIVITIES
TIME: 1 HOUR 30 MINUTES**

A: Listening and Speaking

Listen to the teacher's story and answer the questions:

Once upon a time there lived a hyena and a hare. The hyena was very greedy; he could eat anything he could find. The hare had three babies. The hyena had two babies. One day the hare went for a journey and left her babies with the hyena. The hyena ate all the babies of the hare. They became enemies.

Questions:

1. How many animals are in the story? _____
2. The hyena was very _____
3. How many babies did the hare have? _____
4. Where did the hare go? _____
5. What did the hyena do to the hare's babies? _____

B: Reading Aloud

Read the passage aloud to the teacher:

One evening, Dona saw a giant as he was walking home from school. He ran as fast as a deer and told his father, who did not believe his son. At night, as they were sleeping, the giant came to their home and ate all the cows, goats, and sheep. The following morning they were all surprised.

C: Grammar

Read the passage and answer the questions:

Neby visits a health centre:

Neby visited the health centre with her father. She had a hurt arm. She saw a man older than her father. He was being carried out of the ambulance. The man had an ugly wound on his knee. While waiting for the doctor, Neby wondered why people get sick.

Answer the questions:

1. Why did Neby visit the health centre with her father? _____
2. Neby saw a man who had _____ on his knee.

Complete the sentences using (please, good morning, thank you):

3. Your mother has given you a present. _____
4. They want to request for something. _____
5. When you meet somebody in the morning. _____

Choose the correct word from brackets:

6. My father _____ football every week. (play, plays)
7. The farmers _____ the long grass. (cut, cuts)
8. Maria _____ delicious food. (cook, cooks)
9. Do you _____ storybooks? (read, reads)

Write the words correctly:

10. looc _____
11. theba _____
12. niccli _____

Complete the sentences using

did, done, do, does

13. They have _____ the work their teacher gave them.
14. Where _____ they live?

15. _____ you like cooking chapati?
16. We _____ our best in the field last week.

Choose the correct word to fill in the blank

somebody, nobody, everybody

17. I can see _____ taking the sheep to the river.
18. John met _____ on the way to school.
19. If _____ works hard, our grade will be the best.
20. I can't see _____.

D: Comprehension

Story: Aunt Mary's Wedding

It was a sunny day. Roda and her brother, Tom, woke up early. They were going to town to attend Aunt Mary's wedding. Their mother took them to the bus stop. Roda and Tom happily boarded the green bus. When they arrived at town, they found their aunt waiting for them. As they walked home, the children talked about the wedding. Roda had packed her pink nice dress. Tom had packed his green shirt and blue jeans. This is what they were going to wear at the wedding.

Questions:

1. How did Roda and Tom travel? _____
2. Tom dressed in _____ and _____ at the wedding.
3. What is the title of the story? _____
4. What do you think they ate at the wedding? _____
5. Who took Roda and Tom to the bus station? _____

E: Writing

Write a short story about:

MY TEACHER
